

DEVAMATHA CMI PUBLIC SCHOOL
ANNUAL EXAMINATION 2017 - 2018
MATHEMATICS

Std : I _____

Time : 2 h.

Marks : 50

Name : _____

Roll No. _____

I Fill in the blanks :

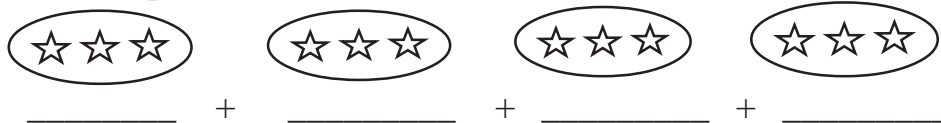
(½x10=5)

1. $47 =$ _____ tens + _____ ones.
2. 1 more than 85 is _____.
3. $30 + 5 =$ _____.
4. The number before 60 is _____ .
5. $70 - 50 =$ _____.
6. $7 +$ _____ = 14
7. $85 - 0 =$ _____.
8. Monday, _____, Wednesday.
9. Give the numeral for sixty seven = _____.
10. 4 times 2 is _____.

II Do as Directed:

(1x12=12)

11. Write the repeated addition sentence.



12. Name the long hand of the clock.

13. Complete the pattern:

52, 62, 72, _____ , _____.

14. Name the day that comes before Saturday.

15. How many 25p coins makes one rupee?

16. How long the given object is?



= _____ Crayons

17. Ring the biggest one :

Watermelon, Orange, Lemon

18. Rewrite in increasing order.

27, 13, 63, 10

Answer: _____.

19. Subtract :

$$\begin{array}{r} 93 \\ - 50 \\ \hline \\ \hline \end{array}$$

20. Ring the bigger number and tick the smaller number.

29, 82, 10, 43

21. Count how much money.


 = ₹ _____

22. Whose picture is printed on all Indian currency notes?

III Solve the following :

(2x12=24)

23. Write the time in two ways.



a) _____.

b) _____.

24. Add :

$$\begin{array}{r} \text{a) } 67 \\ + 22 \\ \hline \\ \hline \end{array}$$

$$\begin{array}{r} \text{b) } 45 \\ + 21 \\ \hline \\ \hline \end{array}$$

25. Rewrite in decreasing order.

32, 49, 19, 63

Answer: _____.

26. Subtract :

$$\begin{array}{r} \text{a) } 89 \\ - 43 \\ \hline \\ \hline \end{array}$$

$$\begin{array}{r} \text{b) } 99 \\ - 29 \\ \hline \\ \hline \end{array}$$

27. Complete the pattern :

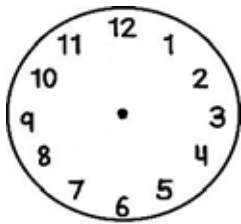
a) 2, 4, 6, 8, _____, _____

b) 10, 15, 20, 25, _____, _____

c) 4, 8, 12, 16, _____, _____

d) 2, 12, 22, 32, _____, _____

28. Draw the arms of the clock to show 6 o'clock.



29. Count how much money :

a) $\textcircled{5}$ $\text{₹ } 10$ $\textcircled{2}$ = ₹ _____

b) $\text{₹ } 20$ $\text{₹ } 10$ $\textcircled{5}$ $\textcircled{1}$ = ₹ _____

30. Write down the first day and last day of the week.

a) First day = _____

b) Last day = _____

31. 73 people are at the coffee shop 12 people leave to catch a flight. How many are left in the coffee shop.

Answer : _____

32. Fill in the blanks in order :

a) Wednesday, _____ , Friday

b) _____ , Saturday, Sunday

33. Put the correct sign and solve :

32 roses

43 lilies

$$\begin{array}{r} 32 \\ \square 43 \\ \hline \\ \hline \end{array} \text{Flowers}$$

34. Count back to subtract :

a) $57 - 3$

57 [®] ○ ○ ○

$$57 - 3 = \underline{\hspace{2cm}}$$

b) $84 - 4$


84 [®] ○ ○ ○

$$84 - 4 = \underline{\hspace{2cm}}$$

IV Answer the following:

(3x3=9)

35. Count each kind of shape and write it in the table below:



Name of Shape	Number
Triangle	
Square	
Circle	
Rectangle	

36. Ring the correct amount of money :

1. ₹ 15 ₹ 10 ₹ 5 1 2

2. ₹ 24 ₹ 20 1 2 2 5 5

3. ₹ 45 ₹ 20 ₹ 20 ₹ 10 1 2 5

37. Match the following:

A	B
$5 + 5 + 5 + 5 + 5 + 5$	4 times 10
$2 + 2 + 2$	6 times 5
$10 + 10 + 10 + 10$	3 times 2
